



परमाणु ऊर्जा शिक्षण संस्था
Atomic Energy Education Society

टर्म-1/आवधिक परीक्षा-2 2023-24 Term-I/PT-II Examination 2023 - 24

कक्षा/Class :III

अवधि/Duration: 3 hours

विषय/Subject :EVS

अधिकतमअंक/Maximum . Marks: 80

To be filled by the student

Unique Examination No.: _____

Class /Sec.:_____ Date of Examination: _____ Day of Examination: _____

Name of the School : _____

Invigilator's Sign: _____

To be filled by the teacher

Marks Obtained

Total Marks


Examiner's Sign : _____ Cross Checker Sign : _____

Exam I/C Sign : _____


Section A : Observation and Reporting (30 marks)

Q1. Observe the given pictures. Choose the correct option and fill in the blanks. (1 X 6 =6)


a) An _____ is used to carry
ill person to the hospital. (**tractor** **ambulance** **cycle**)



b) A _____ delivers letters and
parcels to our home.(**doctor** **farmer** **postman**)

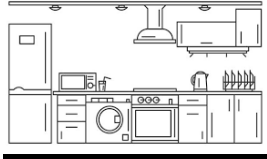


c) A _____ tree has thick trunk.
(**tulsi** **mango** **mint**)

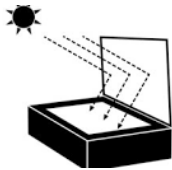


d) We cook food in the _____.

(**kitchen** **living room** **bathroom**)



e) In a _____ the food is cooked by
the heat of the sun. (**oven** **solar cooker** **heater**)



f) A _____ stitches the leaves together
to make a nest.



(eagle

pigeon

tailor bird)

Q2. Match the faces with the correct expression .

(1 x 4=4)



Sad

Afraid

Angry

Happy

Q3. Give the examples of any two.

(1 X 6 =6)

a) Food items made from rice.

b) Leaves that have strong smell.


c) Animals that live in water.

d) Vehicles that have four wheels.

e) Uninvited guests in our house.

f) Activities that do not need water.

Q4. Look at the given pictures and rearrange the steps of making the chapatti (roti) and write them below in correct order. (1x 5 =5)



1. Put it on tava and cook it on the fire.
2. Kneading the flour into dough.
3. Rolling out the balls on a roller pin.
4. Taking out the flour in a utensil.
5. Making small balls of the dough.

1. _____
2. _____
3. _____
4. _____
5. _____


Q5. Look at these pictures and answer the questions given below. (2 x 2=4)

A)



1) What are these called?

2) Where do we use these?






B)

1) Where does a woodpecker make holes?

2) What does a woodpecker eat?


Q6. Look at the picture and answer the questions given below. (5)



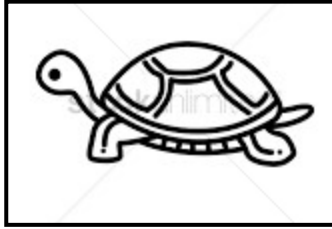
- a. Appu saw that banana trees were _____. (dancing /drooping)
- b. Appu bathed his body in the _____. (river / puddle)
- c. Appu carried water in its _____. (mouth / trunk)
- d. Appu _____ water on the tress. (plucked / poured)
- e. When banana trees got water, they become _____. (alive / dead)

Identification and Classification.(25 marks)


Q7. Identify the given pictures and write their names below it. (1 x5 =5)




a. _____




b. _____



c. _____



d. _____



e. _____

Q8. Classify the following into two groups. (1 x 2=2)

Potato	Carrot	Apple	Rice
Food items that can be eaten raw.		Food items that can be eaten only after cooking.	

Q9. Answer the following questions.

(2 x 2=4)

a) How do the feathers help the birds?

b) Which is our first school?

Q10. Name the following.

(1 x4 =4)

a) Your father's mother is your _____ .

b) A person who cannot hear is called _____ .

c) A person who repairs cars and scooters is a _____ .

d) A bird that has a crest on its head is _____ .

Q11. Circle the odd one out.

(1 x4 =4)


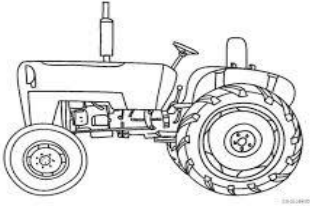

a) Snail crocodile bird tortoise

b) Rangoli broom diyas toran

c) Mother barber sister father

d) Roasting baking tapioca boiling

Q12. Identify the vehicles and find out what they are used for. (2x3=6)

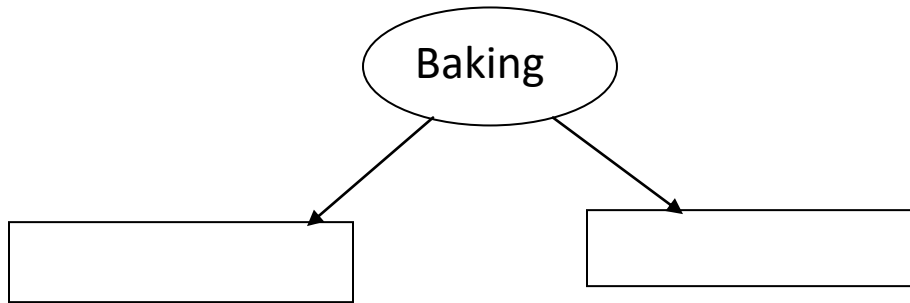
Picture	Name of the vehicle	USED FOR
	<hr/>	
	<hr/>	
	<hr/>	

Discovery of Facts (25 marks)

Q13. Select from the box the names of food items that are prepared by baking.

(1 x2=2)

Dhokla cake chapatti pizza idli dosa



Q14. In the maze given below shade the five sources of water and write them in the blanks given below. (1 x5 =5)

D	E	G	B	M	S	R	U	C
W	A	T	E	R	F	A	L	L
E	L	A	K	E	R	P	X	Q
L	S	E	A	S	A	O	M	T
L	W	I	Q	Y	I	N	N	A
X	W	E	L	L	N	D	Y	P

1. _____

2. _____

3. _____

4. _____

5. _____

Q15. Who am I ?

(1 x 4= 4)

a. My feathers are green, my beak is red, guava and red chilli I'm fed.

I love to copy people's voice.

Ans. _____

b. On the walls, webs I weave , where insects stick and cannot leave.

Ans. _____

c. ChhukChhukChhuk , I am on the track.

Stop StopStop, all the stations say!

Ans. _____

d. Black are my feathers and black is my beak,

Kau- Kau I do all day long.

Ans. _____

Q16. Answer the following questions.

(2 x2 =4)

a) How do deaf and dumb people communicate?

b) How do you keep your house clean?

Q17. Match the following.

(1 x 5 = 5)

A

B

a. Mechanic

Treatment of patients is done here.

b. Boat

bring rains

c. Hospital

a person who repairs cars and scooters

d. Clouds

It is a river.

e. Ganga

is used to travel on water.

Q18. Draw your favourite bird colour it and label any three parts. (5)

